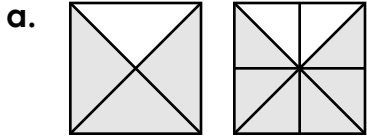


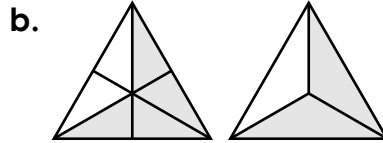
Name: _____

Equivalent Fractions

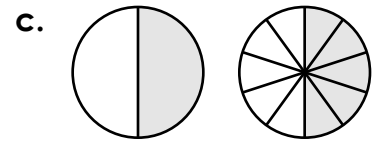
Fill in the missing fraction parts.



$$\frac{3}{4} = \frac{\quad}{8}$$



$$\frac{4}{6} = \frac{\quad}{3}$$



$$\frac{1}{2} = \frac{\quad}{10}$$

d.
$$\frac{6}{12} = \frac{\quad}{6}$$

e.
$$\frac{1}{3} = \frac{\quad}{6}$$

f.
$$\frac{1}{6} = \frac{\quad}{12}$$

g.
$$\frac{5}{10} = \frac{\quad}{6}$$

h.
$$\frac{2}{3} = \frac{\quad}{9}$$

i.
$$\frac{2}{4} = \frac{\quad}{6}$$

j.
$$\frac{1}{4} = \frac{\quad}{12}$$

k.
$$\frac{6}{9} = \frac{\quad}{3}$$

l.
$$\frac{2}{5} = \frac{\quad}{10}$$

m.
$$\frac{6}{8} = \frac{\quad}{12}$$

n.
$$\frac{5}{7} = \frac{\quad}{14}$$

o.
$$\frac{14}{16} = \frac{\quad}{8}$$