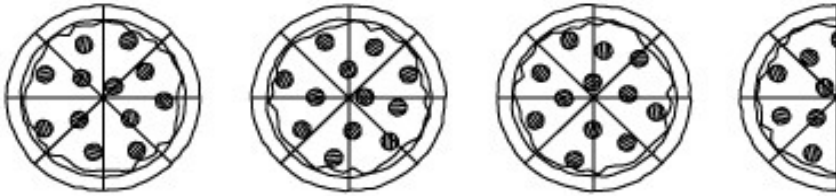



Name: _____

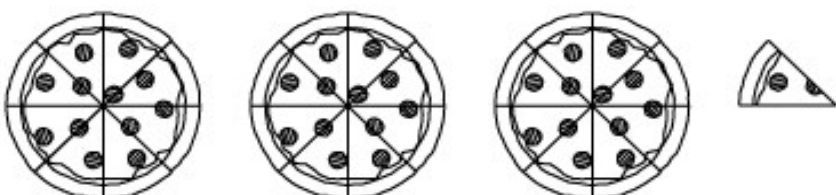
Mixed Numbers

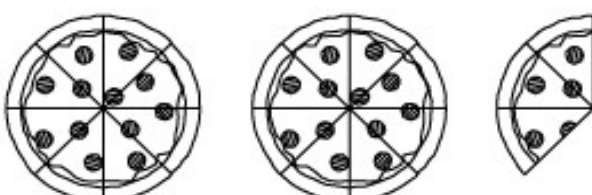
How Much Pizza?

Tell how much pizza is left. Write your answers as mixed numbers.


a.  _____

b.  _____

c.  _____

d.  _____

e.  _____

f.  _____

ANSWER KEY

a. $3 \frac{4}{8}$

b. $2 \frac{5}{8}$

c. $3 \frac{1}{8}$

d. $2 \frac{3}{8}$

e. $1 \frac{6}{8}$

f. $3 \frac{7}{8}$